

**Task 1: Calendar Math: Complete today's calendar activities.**

# CALENDAR MATH

Happy **Wednesday** Kindergarten!

Today is **Wednesday, April 8, 2020**

## CALENDAR

1. These are spheres. **Circle** or **write** the word that best describes the size of the ball on the 5<sup>th</sup> day?



**tiny, large, in-between**


2. Can you find an object shaped like a **sphere** in your house?

(Write your answer on the line)

---

## DAILY DEPOSITOR

3. How many dots are on this domino?




Write the number on the line.

---

## COUNTING TAPE AND CLIP COLLECTION

4. How many clips do we have in our collection today?




Write the number on the line.

---

# GRAPH

5. Which animal got the **MOST** votes?

(Circle or write your choice on the line.)



**dog**

**cat**

**fish**

\_\_\_\_\_

6. How many votes are on our graph **in all**?

(Circle or write your choice on the line.)

**15**

**12**

**16**

\_\_\_\_\_

## Task 2: Lesson Introduction

**Directions:** Watch the instructional video about addition stories.

[https://app.seesaw.me/pages/shared\\_item?item\\_id=item.ee8d8b2a-073c-4b1c-86cb-7219e625deed&share\\_token=s6V2sINpTpdBy5hfEDGXw&mode=share](https://app.seesaw.me/pages/shared_item?item_id=item.ee8d8b2a-073c-4b1c-86cb-7219e625deed&share_token=s6V2sINpTpdBy5hfEDGXw&mode=share)

## Task 3: Learn

**Directions:** Watch the instructional video to learn about addition stories.

[https://app.seesaw.me/pages/shared\\_item?item\\_id=item.f9b4765e-04af-499f-8e60-0028ebe1a81c&share\\_token=iFQlg42tT2u3ZxJqpcvuZg&mode=share](https://app.seesaw.me/pages/shared_item?item_id=item.f9b4765e-04af-499f-8e60-0028ebe1a81c&share_token=iFQlg42tT2u3ZxJqpcvuZg&mode=share)



## Task 4: Try



**Directions:** Complete the two “Try” problems below. Use the link below to watch the video for guidance and additional support while you complete the “Try” activity or use it to check your work after completing the two practice problems.

[https://app.seesaw.me/pages/shared\\_item?item\\_id=item.822238b2-e6de-426e-8f3b-a0479029aa57&share\\_token=fu4z1w-QTh2\\_SpjEVW7Osw&mode=share](https://app.seesaw.me/pages/shared_item?item_id=item.822238b2-e6de-426e-8f3b-a0479029aa57&share_token=fu4z1w-QTh2_SpjEVW7Osw&mode=share)


Complete  
numbers 1-6



\_\_\_\_\_  are on top of the .

\_\_\_\_\_  is beside the .

There are \_\_\_\_\_  in all.



\_\_\_\_\_  are on the .

\_\_\_\_\_  are in the air.

There are \_\_\_\_\_  in all.

**Task 5: Independent Activity**


**Directions:** Complete the “**Independent Practice**” resource pages on your own. Then, turn this assignment into your teacher. Use each picture to make an addition story. Fill in each blank.




Complete numbers 1-2


Adam builds 3 

Sarah builds \_\_\_\_\_ 

Adam and Sarah build \_\_\_\_\_  in all.




**Complete  
numbers 3-5**

\_\_\_\_\_  are on the ground.

\_\_\_\_\_  join them.

There are \_\_\_\_\_  in all.



\_\_\_\_\_  are in the .

\_\_\_\_\_  are **not** in the .

There are \_\_\_\_\_  in all.

**Complete  
numbers 6-8**

**Note to the Teacher:** If there is anything that is unclear, write a note to me below so we can discuss it together during my office hours today or tomorrow.

**Reminder:** Complete your fact practice!